









Counting by 10s to 100

10, ten,	20, twenty,	30, thirty,	40, forty,	50, fifty,
60, sixty,	70, seventy,	80, eighty,	90, ninety,	100 one hundred

Count by tens. Then write the numbers.

1.  4 groups of 10
40
forty

2. 
 _____ groups of 10

3. 

 _____ groups of 10

Problem Solving *Mental Math*

4. Laura saves 10¢ each day.
How much money has she saved after 5 days?

_____¢

5. Kit saves 10¢ each day.
How much money has he saved after 7 days?

_____¢