



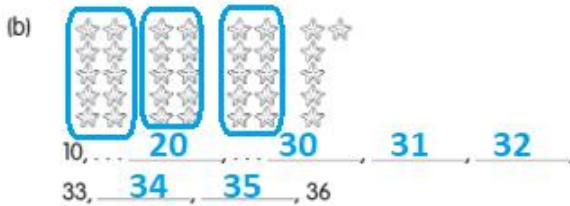
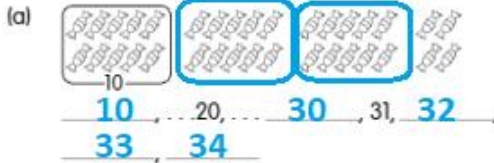
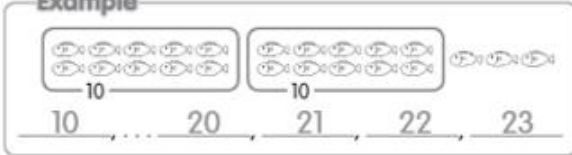
CHAPTER  
**10**

**Numbers To 40**

**Practice 1 Counting To 40**

- (1) Count in tens and ones.  
Fill in the missing numbers.

Example



- (2) Circle groups of 10.  
Then count and write the numbers.

Example

