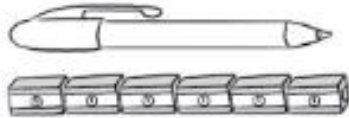


Practice 4 Measuring Length

- (1) Count.
Fill in the blanks.

Example




The pen is about 6  long.




The comb is about _____  long.



The umbrella is about _____  long.



The photo frame is about _____  long.

- (2) Fill in the blanks.
What is the length of each tape?

Example



The tape is about 4 paper clips long.

It is about 5 coins long.



The tape is about _____ paper clips long.

It is about _____ coins long.



The tape is about _____ paper clips long.

It is about _____ coins long.