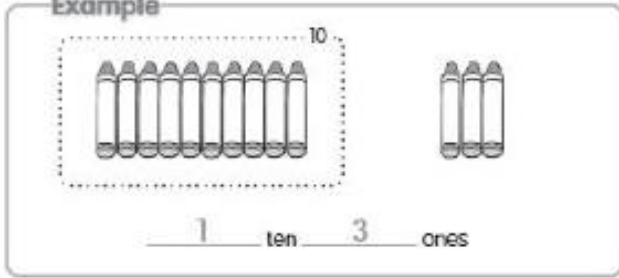


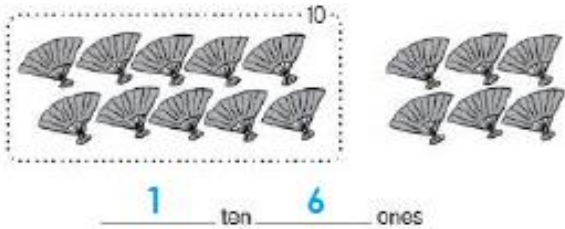


(5) Look at the pictures.
Fill in the blanks.

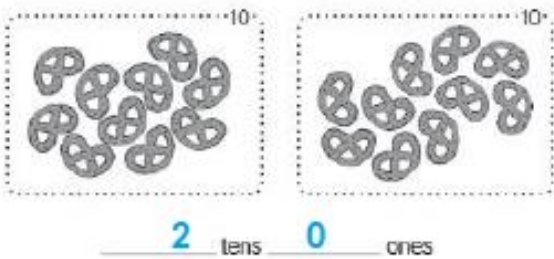
Example



(a)

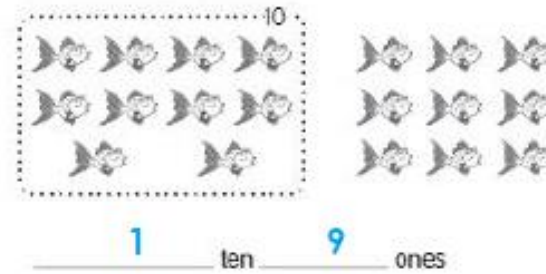


(b)

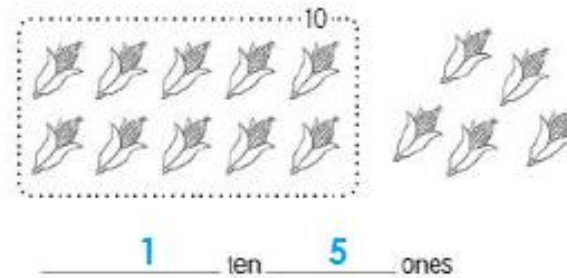


5

(c)



(d)



(6) Fill in the blanks.

(a) $13 = 1 \text{ ten } 3 \text{ ones}$

(b) $17 = 1 \text{ ten } 7 \text{ ones}$

(c) $14 = 1 \text{ ten } 4 \text{ ones}$

(d) $16 = 1 \text{ ten } 6 \text{ ones}$

(e) $18 = 1 \text{ ten } 8 \text{ ones}$

6