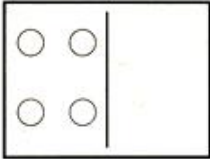







Zero in Addition

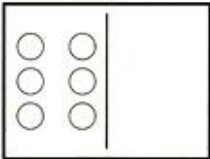
Write an addition sentence.


1. 
 $4 + 0 = 4$

2. 
 ___ + ___ = ___

3. 
 ___ + ___ = ___

4. 
 ___ + ___ = ___

5. 
 ___ + ___ = ___

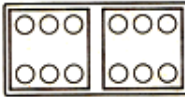
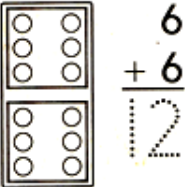
6. 
 ___ + ___ = ___

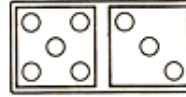
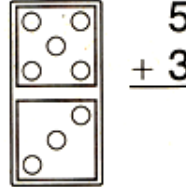
Draw a story about adding zero:

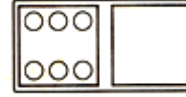
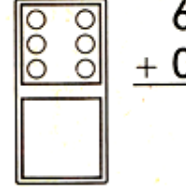


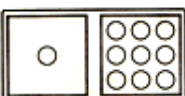

Vertical Addition

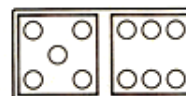
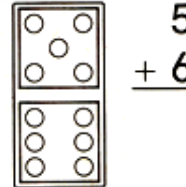
Add to find the sum.

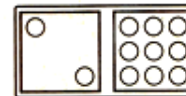
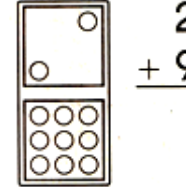
1. 
 $6 + 6 = 12$


2. 
 $5 + 3 = \underline{\quad}$


3. 
 $6 + 0 = \underline{\quad}$


4. 
 $1 + 9 = \underline{\quad}$


5. 
 $5 + 6 = \underline{\quad}$


6. 
 $2 + 9 = \underline{\quad}$


Problem Solving *Number Sense*

7. Complete the pattern.

$$\begin{array}{r} 2 \\ + 2 \\ \hline 4 \end{array}$$

$$\begin{array}{r} 3 \\ + 2 \\ \hline 5 \end{array}$$

$$\begin{array}{r} 4 \\ + 2 \\ \hline 6 \end{array}$$

$$\begin{array}{r} 5 \\ + 2 \\ \hline \square \end{array}$$

$$\begin{array}{r} \square \\ + \square \\ \hline \square \end{array}$$