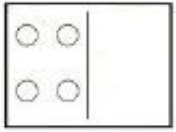



Solucionario




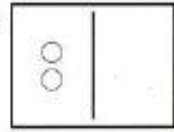
Zero in Addition

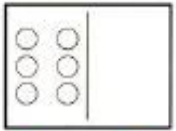
Write an addition sentence.


1. 
 $4 + 0 = 4$

2. 
 $0 + 3 = 3$

3. 
 $0 + 5 = 5$

4. 
 $2 + 0 = 2$

5. 
 $6 + 0 = 6$

6. 
 $0 + 8 = 8$


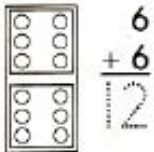
Draw a story about adding zero:

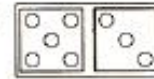

Las respuestas pueden variar


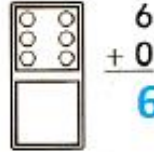



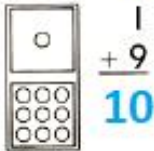
Vertical Addition

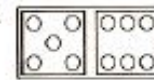
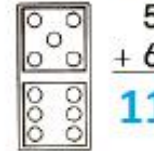
Add to find the sum.

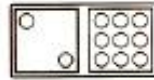
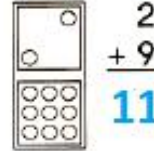
1. 
 $6 + 6 = 12$


2. 
 $5 + 3 = 8$


3. 
 $6 + 0 = 6$


4. 
 $1 + 9 = 10$


5. 
 $5 + 6 = 11$


6. 
 $2 + 9 = 11$


Problem Solving Number Sense

7. Complete the pattern.

$$\begin{array}{r} 2 \\ + 2 \\ \hline 4 \end{array}$$

$$\begin{array}{r} 3 \\ + 2 \\ \hline 5 \end{array}$$

$$\begin{array}{r} 4 \\ + 2 \\ \hline 6 \end{array}$$

$$\begin{array}{r} 5 \\ + 2 \\ \hline \boxed{7} \end{array}$$

$$\begin{array}{r} \boxed{6} \\ + \boxed{2} \\ \hline \boxed{8} \end{array}$$