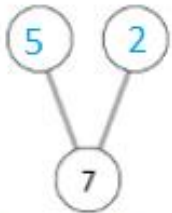


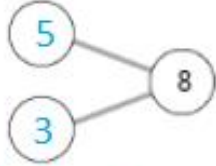


Making Numbers

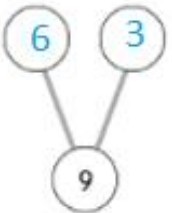
Count and complete each number bond. Then fill in the blanks.



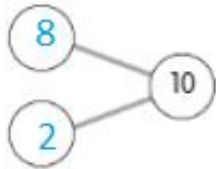
5 and 2 make 7.



5 and 3 make 8.



6 and 3 make 9.



8 and 2 make 10.

Making 10

We can show 10 in different ways.

Write the numbers that show ways to make 10.



8 and 2



3 and 7



6 and 4



9 and 1



5 and 5



2 and 8

Problem Solving *Number Sense*

7. Circle all the ways that make 10.

4 and 5

3 and 7

5 and 5

8 and 2

6 and 3

2 and 7