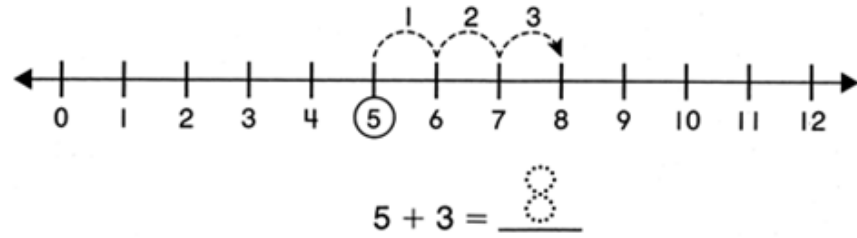




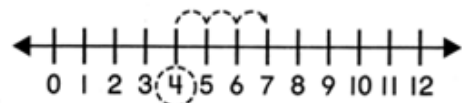
Solucionario

Adding Using a Number Line

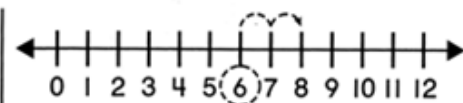
To help you count on, circle the number you start at.
Draw to show the addition on the number line.



Add 1, 2, or 3. Use the number line to help you.



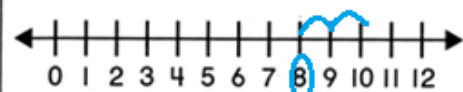
1. $4 + 3 = 7$



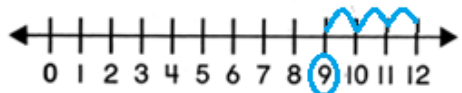
2. $2 + 6 = 8$



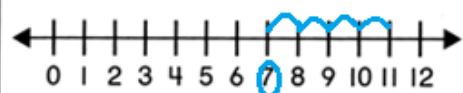
3. $3 + 6 = 9$



4. $8 + 2 = 10$



5. $9 + 3 = 12$



6. $7 + 4 = 11$

Spot the doubles



Draw the missing spots and write the numbers.

$3 + 3 = 6$
double 3 is 6

$4 + 4 = 8$
double 4 is 8

$1 + 1 = 2$
double 1 is 2

$2 + 2 = 4$
double 2 is 4

$6 + 6 = 12$
double 6 is 12

$5 + 5 = 10$
double 5 is 10