



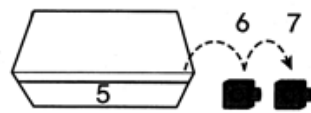
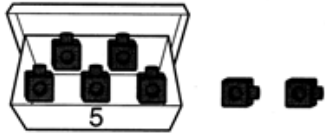
Counting On 1, 2, or 3

There are 5 cubes in the box.

Add 2 more cubes.

Start with 5.

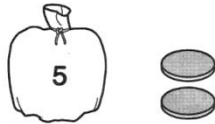
Count on 2 more.



$$5 + 2 = 7$$

Count on to solve. Use counters if you like.

1.



$$5 + 2 = 7$$

2.




$$7 + 1 = \underline{\quad}$$

3.



$$6 + 3 = \underline{\quad}$$

4.



$$8 + 2 = \underline{\quad}$$

5.



$$9 + 3 = \underline{\quad}$$

6.

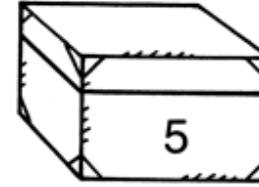


$$6 + 1 = \underline{\quad}$$

Adding in Any Order

Write two addition facts that tell about the picture.

1.



$$\underline{\quad} + \underline{\quad} = \underline{\quad}$$

$$\underline{\quad} + \underline{\quad} = \underline{\quad}$$

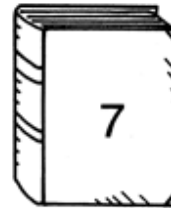
2.



$$\underline{\quad} + \underline{\quad} = \underline{\quad}$$

$$\underline{\quad} + \underline{\quad} = \underline{\quad}$$

3.



$$\underline{\quad} + \underline{\quad} = \underline{\quad}$$

$$\underline{\quad} + \underline{\quad} = \underline{\quad}$$