






Making Numbers

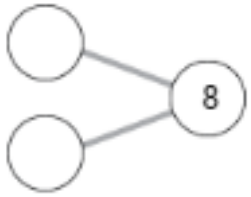
Count and complete each number bond. Then fill in the blanks.

(a) 





_____ and _____ make 7.

(b) 




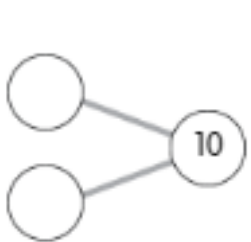
_____ and _____ make 8.

(c) 



_____ and _____ make 9.

(d) 



_____ and _____ make 10.



Making 10

We can show 10 in different ways.

Write the numbers that show ways to make 10.

1. 

8 and 2

2. 

_____ and _____

3. 

_____ and _____

4. 

_____ and _____

5. 

_____ and _____

6. 

_____ and _____

Problem Solving *Number Sense*

7. Circle all the ways that make 10.

4 and 5

3 and 7

5 and 5

8 and 2

6 and 3

2 and 7