




PROFESOR: Mirtha A. - Lilian B.

### GUÍA REPASO 3° BÁSICO


## Valor posicional

Completa, siguiendo el siguiente ejemplo.




C	D	U
2	6	2

262




C	D	U
1	9	8

198




C	D	U
3	0	5

305




C	D	U
2	2	6

226




C	D	U
4	3	0

430



C	D	U
4	0	0

400




C	D	U
2	4	4

244

## Identificar centenas, decenas y unidades

Escriba la cantidad. Luego escriba cuántas centenas, decenas y unidades hay.


1



4 C, 5 D y 7 U

457

2



3 C, 7 D y 4 U

374


3



5 C, 2 D y 9 U

529


4



1 C, 9 D y 5 U

195

5



7 C, 1 D y 3 U

713

6



8 C, 0 D y 9 U

809

7



6 C, 3 D y 0 U

630