




PROFESOR: Mirtha A. - Lilian B.


GUÍA REPASO 3° BÁSICO

Valor posicional


Completa, siguiendo el siguiente ejemplo.




C	D	U	
2	6	2	262




C	D	U	




C	D	U	




C	D	U	



C	D	U	



C	D	U	




C	D	U	

Identificar centenas, decenas y unidades

Escriba la cantidad. Luego escriba cuántas centenas, decenas y unidades hay.


1



4 C, 5 D y 7 U

457

2



___ C, ___ D y ___ U

3



___ C, ___ D y ___ U

4



___ C, ___ D y ___ U

5



___ C, ___ D y ___ U

6



___ C, ___ D y ___ U

7



___ C, ___ D y ___ U
